

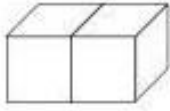
FICHAS PASATIEMPOS MATEMÁTICAS

SOPA DE NÚMEROS

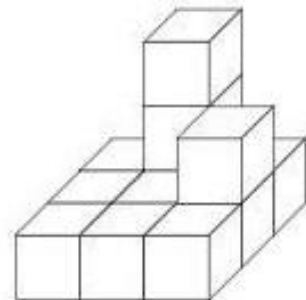
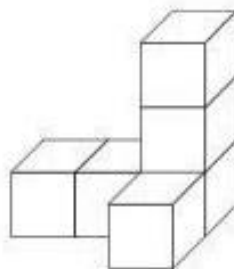
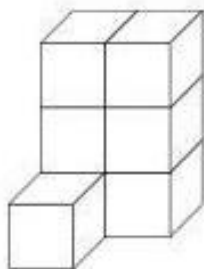
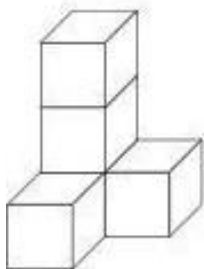
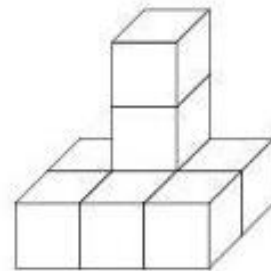
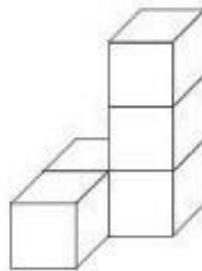
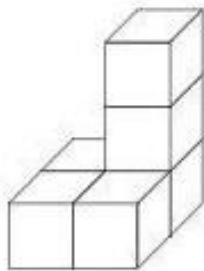
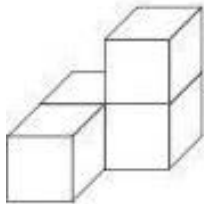
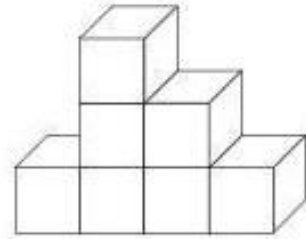
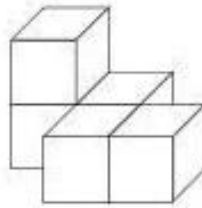
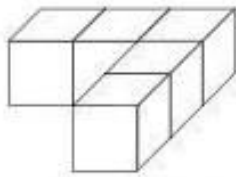
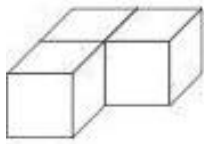
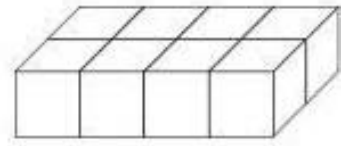
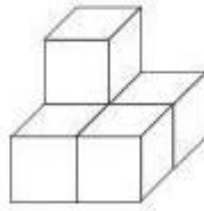
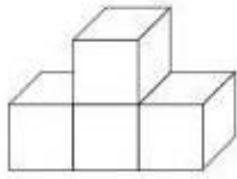
7203 4441 3178 8415 7470
3908 9354 5711 1179 7451

7	4	6	5	9	0	5	2	6	1	7	6	7	9	9	5	0	0	6	0
7	8	7	3	5	0	6	6	6	1	4	3	3	4	8	7	3	7	1	4
3	2	0	8	8	9	6	2	8	6	4	8	7	3	0	6	3	5	1	3
1	6	8	1	9	0	5	7	6	7	4	4	7	7	0	6	8	0	3	5
8	9	7	6	4	5	3	9	5	5	1	2	4	7	0	5	1	0	7	2
6	5	2	4	5	6	1	0	2	4	7	7	2	9	4	1	2	9	8	0
5	4	4	9	6	0	1	9	0	1	9	7	2	4	2	4	8	6	9	8
6	1	2	2	3	0	1	5	3	1	4	1	1	8	4	4	8	7	9	4
6	9	4	4	5	5	7	7	7	9	5	2	7	3	7	8	4	0	9	0
4	3	3	5	7	3	9	8	5	4	6	1	8	1	4	2	6	3	9	5
0	7	0	6	4	8	1	4	5	5	5	3	2	3	6	1	0	2	9	3
3	5	3	9	7	8	3	1	2	4	6	4	6	7	1	0	8	2	9	5
1	5	8	9	5	3	3	5	7	7	4	5	3	7	4	7	2	6	1	4
5	8	2	7	0	7	0	7	6	3	9	3	5	4	8	8	5	2	6	3
6	9	6	3	2	1	5	6	2	8	7	2	8	0	6	6	1	3	5	8
3	0	0	2	3	4	9	0	8	0	0	6	0	6	4	5	9	6	6	4
1	3	0	2	1	0	8	6	1	0	3	0	8	3	9	7	4	1	0	2
1	7	2	6	7	8	0	2	7	5	7	0	6	9	9	8	9	9	6	5
9	6	4	6	8	3	3	2	3	2	4	4	9	5	0	6	3	9	8	9
4	4	8	0	3	7	7	2	5	3	6	4	8	0	8	7	1	3	9	5

CUENTA LOS CUBOS



2



$7 - \square = 2$

$$\begin{array}{c} + \\ 4 \\ = \end{array}$$

$2 + \square = 8$

$$\begin{array}{c} - \\ 3 \\ = \end{array}$$

$\square - \square = 3$

$\square + 1 = \square$

$$\begin{array}{c} + \\ 2 \\ = \end{array}$$

$$\begin{array}{c} - \\ \square \\ = \end{array}$$



$\square - \square = 1$

$\square - \square = \square$

$\square + 3 = 6$

$$\begin{array}{c} + \\ 6 \\ = \end{array}$$

$\square - \square = \square$

$\square + 7 = \square$

$\square - 8 = \square$

$$\begin{array}{c} - \\ 4 \\ = \end{array}$$

$5 - \square = \square$